

Please write clearly in block capitals.

Centre number

--	--	--	--	--

Candidate number

--	--	--	--

Surname

Forename(s)

Candidate signature

GCSE COMBINED SCIENCE: TRILOGY

F

Foundation Tier
Biology Paper 1F

Tuesday 14 May 2019

Afternoon

Time allowed: 1 hour 15 minutes

Materials

For this paper you must have:

- a ruler
- a scientific calculator.

Instructions

- Use black ink or black ball-point pen.
- Fill in the boxes at the top of this page.
- Answer **all** questions in the spaces provided.
- Do all rough work in this book. Cross through any work you do not want to be marked.
- In all calculations, show clearly how you work out your answer.

Information

- The maximum mark for this paper is 70.
- The marks for questions are shown in brackets.
- You are expected to use a calculator where appropriate.
- You are reminded of the need for good English and clear presentation in your answers.

For Examiner's Use	
Question	Mark
1	
2	
3	
4	
5	
6	
7	
TOTAL	

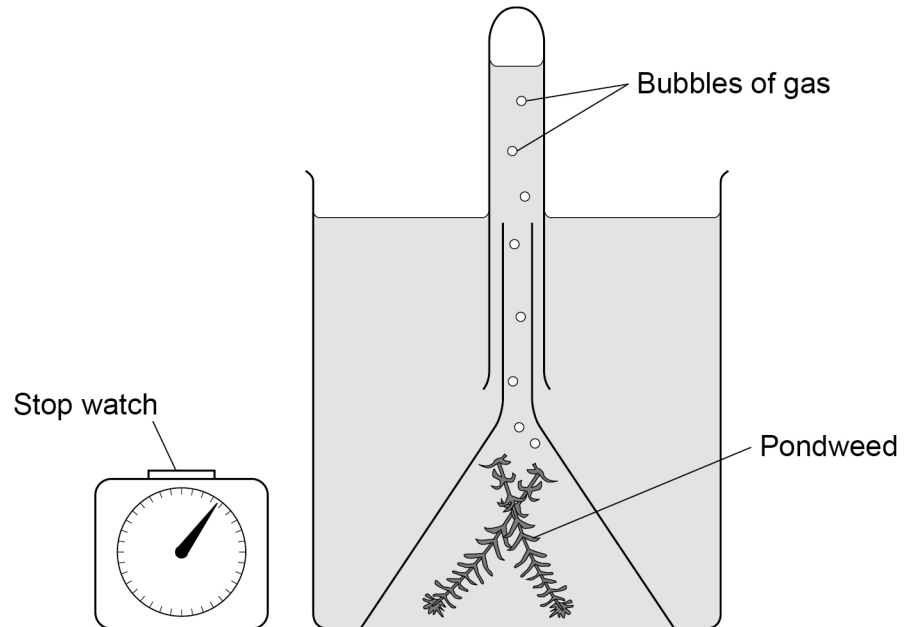


0 1

A student investigated the effect of light intensity on the rate of photosynthesis.

Figure 1 shows some of the apparatus used.

Figure 1



0 1 . 1

Name the gas produced by the pondweed in the light.

[1 mark]

0 1 . 2

Describe **one** way the student could change the intensity of light reaching the pondweed.

[2 marks]



0	1	.	3
---	---	---	---

Describe how the student could use the apparatus in **Figure 1** to measure the rate of photosynthesis.

[2 marks]

Question 1 continues on the next page

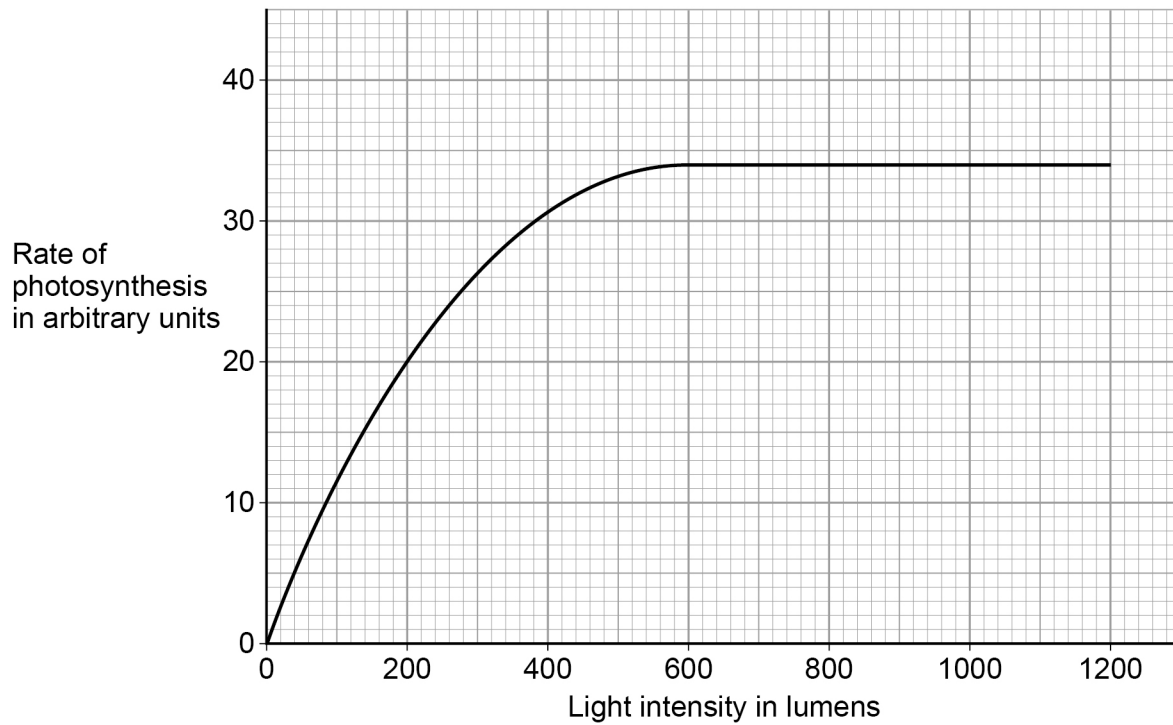
Turn over ►



Figure 2 shows the student's results.

Do not write
outside the
box

Figure 2



0 1 . 4 What was the maximum rate of photosynthesis?

[1 mark]

Maximum rate = _____ arbitrary units



0 1 . 5 At which light intensity was light a limiting factor?

[1 mark]

Tick (✓) **one** box.

200 lumens

600 lumens

1200 lumens

0 1 . 6 Light intensity can affect the rate of photosynthesis.

Give **one** other factor that can affect the rate of photosynthesis.

[1 mark]

8

Turn over ►



0 2

A single-celled organism has a large surface area to volume ratio.

0 2 . 1

How does oxygen enter a single-celled organism?

[1 mark]

Tick (✓) **one** box.

Active transport

Diffusion

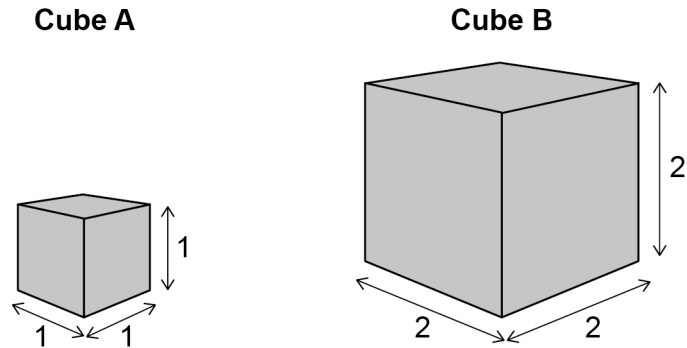
Osmosis



Figure 3 shows two cubes.

The surface area to volume ratio for cube **A** is 6:1

Figure 3



0 2 . 2 Calculate the surface area to volume ratio of cube **B**.

[4 marks]

Surface area of one face of cube **B** _____

Surface area of one face = _____

Total surface area of cube **B** _____

Total surface area = _____

Volume of cube **B** _____

Volume = _____

Surface area to volume ratio = _____ :

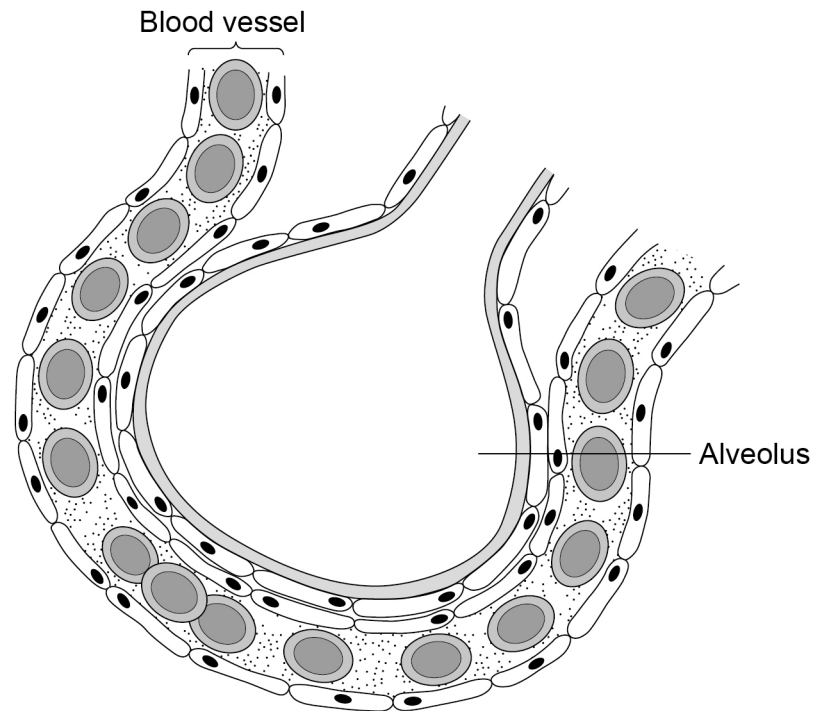
Turn over ►



Multicellular organisms have exchange surfaces to absorb substances.

Figure 4 shows part of the exchange surface in the lungs.

Figure 4



0 2 . 3 Oxygen passes from the alveolus into the blood.

Name the part of the blood that carries the most oxygen.

[1 mark]

0 2 . 4 Name the gas that passes out of the blood into the alveolus.

[1 mark]



0 2 . 5 Alveoli provide a large surface area for gas exchange.

Give **two** other ways the lungs are adapted for efficient gas exchange.

[2 marks]

1 _____

2 _____

9

Turn over for the next question

Turn over ►



0 3

This question is about organisation in living organisms.

0 3 . 1

Write the biological structures from the box in the correct size order.

[3 marks]

cell	nucleus	organ	tissue
------	---------	-------	--------

Smallest



Largest

0 3 . 2

Name **one** animal organ.

[1 mark]

0 3 . 3

Which is a plant tissue?

[1 mark]

Tick (✓) **one** box.

Flower

Leaf

Phloem

Root



Figure 5 shows part of a root viewed using a microscope.

Figure 5

This image cannot be reproduced here due to third-party
copyright restrictions

0 3 . 4

Explain how a root hair cell is specialised for its function.

[2 marks]

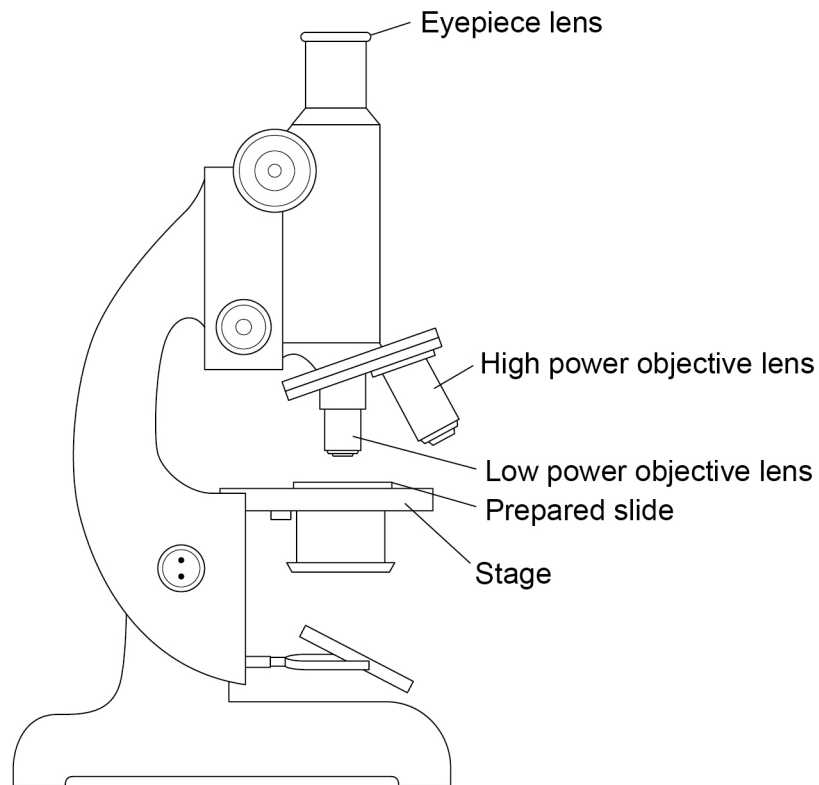
Question 3 continues on the next page

Turn over ►



Figure 6 shows a microscope.

Figure 6



0 3 . 5 It is easier to view the cells using the low power objective lens first.

Give **one** reason why.

[1 mark]

0 3 . 6 To focus the image the objective lens should be moved away from the stage.

Give **one** reason why the objective lens should **not** be moved towards the stage.

[1 mark]



0 3 . 7 The image of the prepared slide in **Figure 6** is viewed with the $\times 10$ objective lens.

The total magnification is $\times 50$

What was the power of the eyepiece lens used?

[1 mark]

Power of eyepiece lens = \times _____

0 3 . 8 Root hair cells do **not** contain chloroplasts.

Suggest **one** reason why.

[1 mark]

11

Turn over for the next question

Turn over ►



0 4

Water is lost from the leaves of a plant through stomata.

0 4 . 1

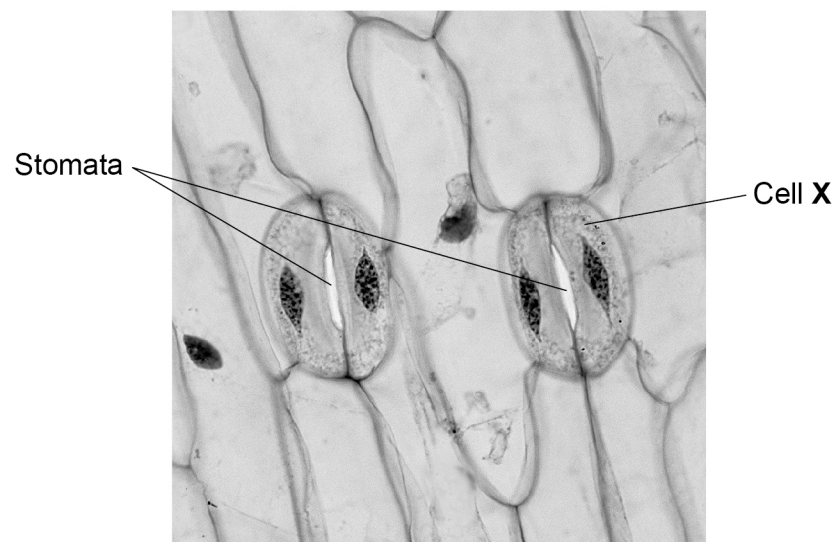
What is the process by which water is lost from the leaves of a plant?

[1 mark]Tick (✓) **one** box.

Osmosis

Photosynthesis

Transpiration

Figure 7 shows stomata on the lower surface of a leaf.**Figure 7**

0 4 . 2 What is the name of cell **X**?

[1 mark]

Tick (✓) **one** box.

Epidermal cell

Guard cell

Palisade cell

Xylem cell

0 4 . 3 The length of cell **X** is 25 mm when viewed at a magnification of $\times 800$

Calculate the real length of cell **X**.

Give your answer in micrometres (μm).

1 mm = 1000 μm

Use the equation:

$$\text{real length of cell} = \frac{\text{size of image}}{\text{magnification}}$$

[3 marks]

Real length of cell **X** = _____ μm

Question 4 continues on the next page

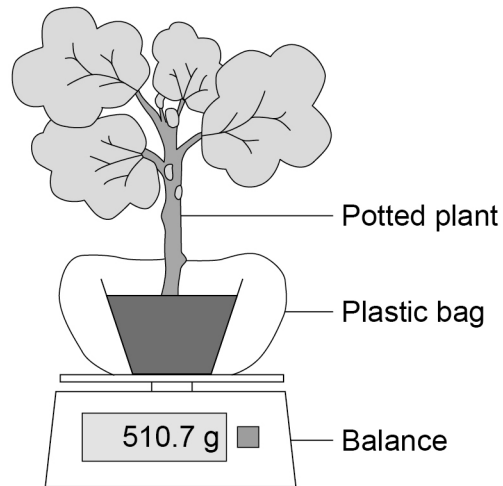
Turn over ►



A student measured the mass of water lost from some similar plants. The plants were at different temperatures.

Figure 8 shows the apparatus used.

Figure 8



This is the method used.

1. Seal a plastic bag around the pot of a potted plant.
2. Place the potted plant with the bag on a balance in a room at 20 °C
3. Record the mass.
4. After 3 hours record the mass again.
5. Calculate the mass of water lost from the plant.
6. Repeat steps 1–5 at 25 °C and at 30 °C with other similar plants.

0 4 . 4 What was the independent variable in this investigation?

[1 mark]

Tick (✓) **one** box.

Initial mass of the plant

Length of time the plant was left

Mass of water lost

Temperature of the room



0	4	.	5
---	---	---	---

Suggest why the student sealed a plastic bag around the pot.

[1 mark]

Question 4 continues on the next page

Turn over ►



Table 1 shows the student's results.

Table 1

Temperature in °C	Mass at the start in g	Mass after 3 hours in g	Mass of water lost in 3 hours in g
20	510.7	508.6	2.1
25	510.4	507.1	3.3
30	X	506.3	4.9

0 4 . 6 What is the resolution of the balance used in this investigation?

[1 mark]

Tick **one** box.

0.1 g 1.0 g 100 g 500 g

0 4 . 7 Calculate value **X** in **Table 1**.

[1 mark]

X = _____ g

0 4 . 8 Give **one** conclusion that can be made from the results in **Table 1**.

[1 mark]

0 4 . 9 Give **two** factors that might affect the rate of water loss from the leaves.

Do **not** refer to temperature in your answer.

[2 marks]

1 _____

2 _____



Turn over for the next question

*Do not write
outside the
box*

**DO NOT WRITE ON THIS PAGE
ANSWER IN THE SPACES PROVIDED**

Turn over ►

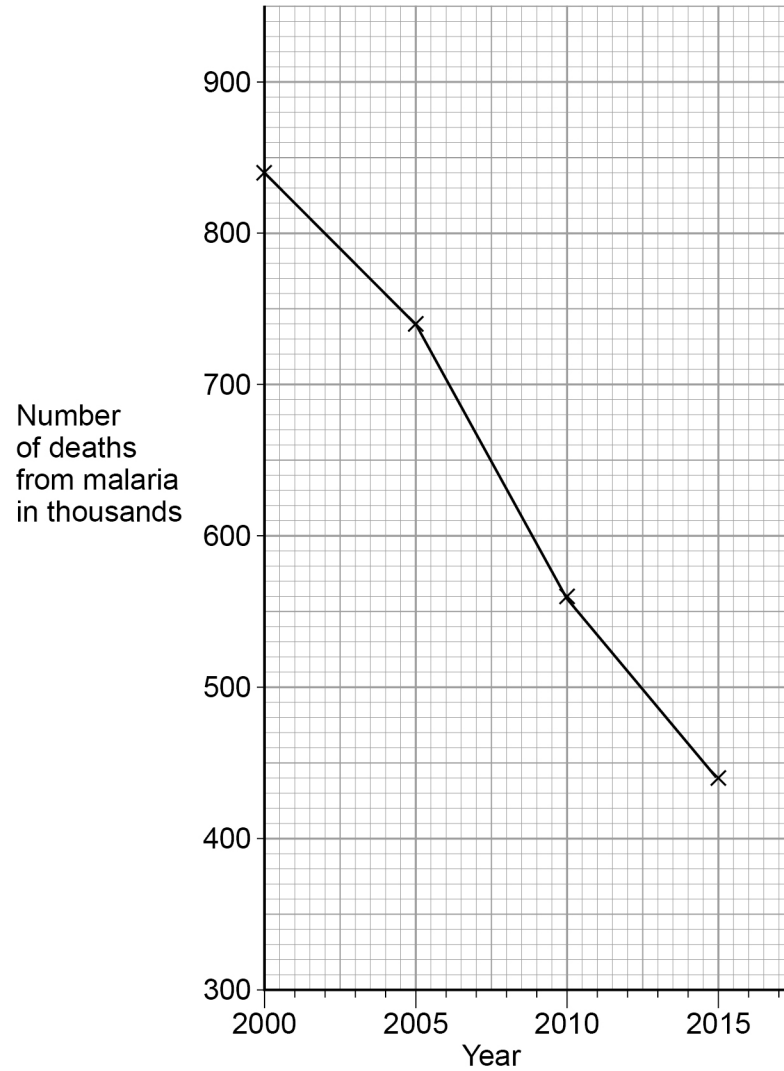


0 5

Malaria is a disease transmitted by mosquitos.

Figure 9 shows information about the number of deaths from malaria.

Figure 9



0 5 . 1

Calculate the decrease in the number of deaths between 2000 and 2015.

[2 marks]

Decrease in number of deaths = _____



0 5 . 2 Which time period shows the greatest decrease in the number of deaths?

[1 mark]

Tick (✓) **one** box.

2000 to 2005

2005 to 2010

2010 to 2015

0 5 . 3 A student looked at **Figure 9** and concluded that there were 800 000 deaths from malaria in 2002.

Suggest **one** reason why this conclusion might **not** be correct.

[1 mark]

0 5 . 4 What type of pathogen causes malaria?

[1 mark]

Tick (✓) **one** box.

Bacterium

Fungus

Protist

Virus

Turn over ►



0 5 . 5 Scientists are developing a vaccine against malaria.

Suggest how a vaccine against malaria could reduce the spread of the disease.

[2 marks]

0 5 . 6 Give **one** way of controlling the spread of malaria.

Do **not** refer to a vaccine in your answer.

[1 mark]

8



Turn over for the next question

*Do not write
outside the
box*

**DO NOT WRITE ON THIS PAGE
ANSWER IN THE SPACES PROVIDED**

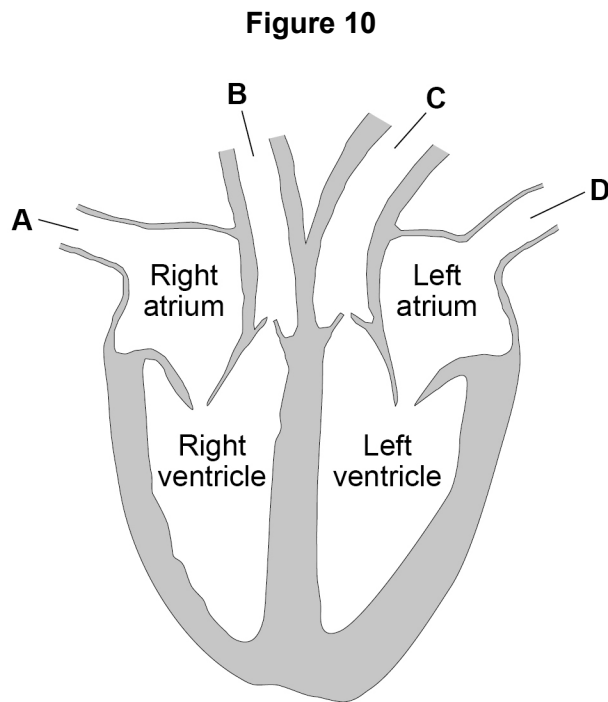
Turn over ►



2 3

0 6

Figure 10 shows a human heart.



0 6 . 1

Which blood vessel carries deoxygenated blood away from the heart to the lungs?

[1 mark]

Tick (✓) **one** box.

A B C D

0 6 . 2

The natural resting heart rate is controlled by a group of cells that act as a pacemaker.

Where in the heart are 'pacemaker cells' found?

[1 mark]

Tick (✓) **one** box.

Left atrium

Left ventricle

Right atrium

Right ventricle



Some people may be treated with a drug to slow their heart rate.

0 6 . 3 Digitalis is a drug that slows the heart rate.

Where does the drug digitalis originate from?

[1 mark]

Tick (✓) **one** box.

Bacteria

Foxgloves

Mould

Willow

Question 6 continues on the next page

Turn over ►



Beta blockers are another type of drug that slows the heart rate.

Table 2 shows information for people who do not take beta blockers and for people who do take beta blockers.

- Stroke volume is the volume of blood pumped out of the heart each time it beats.
- Cardiac output is the total volume of blood pumped out of the heart each minute.

Table 2

	No beta blockers taken		Taking beta blockers	
	At rest	During exercise	At rest	During exercise
Heart rate in beats per minute	68	150	52	88
Stroke volume in cm ³	80	120	X	98
Cardiac output in cm ³ per minute	5440	18 000	2800	8624

0 6 . 4 Calculate stroke volume **X** in **Table 2**.

Use the equation:

$$\text{cardiac output} = \text{stroke volume} \times \text{heart rate}$$

Give your answer to 2 significant figures.

[3 marks]

Stroke volume **X** = _____ cm³



06.5

Some people who take beta blockers get out of breath when they exercise.

Explain why beta blockers can have this effect during exercise.

You should refer to information given in **Table 2**.

[6 marks]

12

Turn over for the next question

Turn over ►



There are no questions printed on this page

*Do not write
outside the
box*

**DO NOT WRITE ON THIS PAGE
ANSWER IN THE SPACES PROVIDED**



07

This question is about digestion.

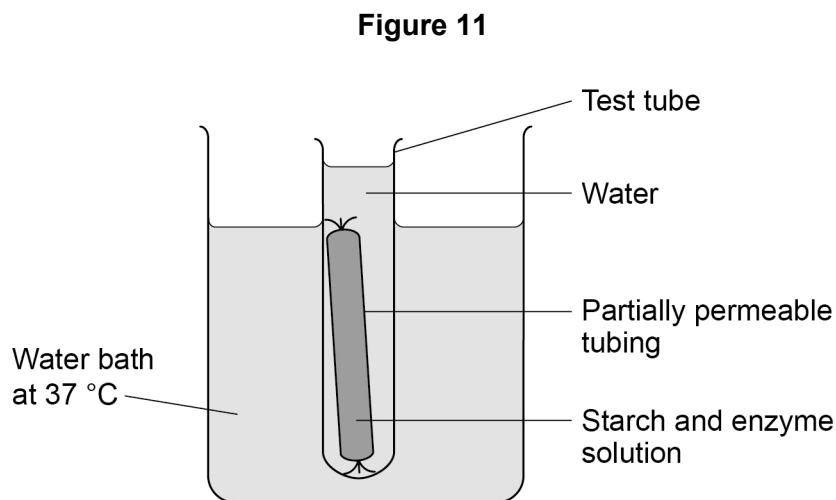
07.1

Name the enzyme that digests starch in the human digestive system.

[1 mark]

A student set up a model to represent the digestion and absorption of food molecules in the digestive system.

Figure 11 shows the student's model.



This is the method used.

1. Fill a test tube with water at 37 °C
2. Test the water for starch and for sugar.
3. Mix together starch and enzyme solution and immediately test it for starch and for sugar.
4. Fill some partially permeable tubing with the starch and enzyme mixture.
5. Seal the tubing and place it in the test tube of water.
6. Place the test tube in a water bath at 37 °C
7. After 30 minutes, test the mixture inside the partially permeable tubing and test the water in the test tube for starch and for sugar.

07.2

Suggest which parts of the body the partially permeable tubing and the water in the test tube represent.

[2 marks]

Partially permeable tubing _____

Water in the test tube _____

Turn over ►

Table 3 shows the results.

Table 3

Test	Description of liquid	Result of starch test	Result of sugar test
1	Mixture inside tubing at start	✓	✗
2	Water in the test tube at start	✗	✗
3	Mixture inside tubing after 30 minutes	✓	✓
4	Water in the test tube after 30 minutes	✗	✓

Key

✓ = Present

✗ = Not present

0 7 . 3 Name the reagents used to test for starch and for sugar.

[2 marks]

Starch _____

Sugar _____

0 7 . 4 Why was there no sugar present in test 1?

[1 mark]

0 7 . 5 Explain the results for test 3.

[2 marks]



*Do not write
outside the
box*

0 7 . 6

Explain the results for test 4.

[2 marks]

10

END OF QUESTIONS



There are no questions printed on this page

*Do not write
outside the
box*

**DO NOT WRITE ON THIS PAGE
ANSWER IN THE SPACES PROVIDED**

Copyright information

For confidentiality purposes, from the November 2015 examination series, acknowledgements of third-party copyright material are published in a separate booklet rather than including them on the examination paper or support materials. This booklet is published after each examination series and is available for free download from www.aqa.org.uk after the live examination series.

Permission to reproduce all copyright material has been applied for. In some cases, efforts to contact copyright-holders may have been unsuccessful and AQA will be happy to rectify any omissions of acknowledgements. If you have any queries please contact the Copyright Team, AQA, Stag Hill House, Guildford, GU2 7XJ.

Copyright © 2019 AQA and its licensors. All rights reserved.



3 2



1 9 6 G 8 4 6 4 / B / 1 F

IB/M/Jun19/8464/B/1F